



Decimal Operations


Name _____

1. 


$$\begin{array}{r} 10.5 \\ - 3.8 \\ \hline 6.7 \end{array}$$

2. 


$$\begin{array}{r} 2.785 \\ + 0.056 \\ \hline 2.841 \end{array}$$

3. 


$$\begin{array}{r} 8.7 \\ \times 1.4 \\ \hline 12.18 \end{array}$$

4. 


$$\begin{array}{r} 45.88 \\ \div 3.1 \\ \hline 14.8 \end{array}$$

5. 


$$\begin{array}{r} 13 \\ + 1.05 \\ \hline 14.05 \end{array}$$

6. 


$$\begin{array}{r} 378.2 \\ - 1.45 \\ \hline 376.75 \end{array}$$

7. 

$$\begin{array}{r} 7.6 \\ \times 0.005 \\ \hline 0.038 \end{array}$$

8. 

$$\begin{array}{r} 107.5 \\ \div 8.6 \\ \hline 12.5 \end{array}$$

9. 

$$\begin{array}{r} 1.05 \\ + 10.08 \\ \hline 11.13 \end{array}$$

Directions:

Solve each problem. Add the features listed next to the corresponding answer below.

376.75 blue eyes
 12.5 bow
 0.038 big eyelashes

2.841 hat
 14.05 pink nose
 14.8 collar

6.7 earrings
 12.18 brown fur
 11.13 brown eyes