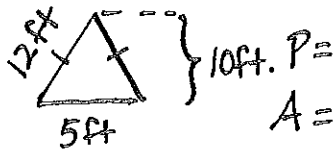
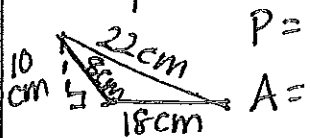


Name: _____

Find perimeter and area:



Draw: $\triangle ABC$

$$\angle A = 65^\circ$$

$$\overline{AB} = 2.5 \text{ cm}$$

$$\angle B = 75^\circ$$

Find the missing angle.
Show your equation.



Write Yes or No if
these measurements
will make \triangle 's.

5, 17, 11 _____

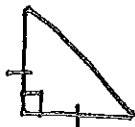
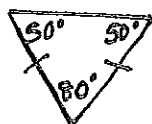

9, 5, 4 _____

10, 4, 7 _____

5, 5, 5 _____

3, 7, 6 _____

Classify by sides & angles



Draw: $\triangle XYZ$

$$\overline{YX} = 6 \text{ cm}$$

$$\angle Y = 55^\circ$$

$$\angle X = 80^\circ$$