


NAME: \_\_\_\_\_


# Ratio Challenge

In Exercises 1-4, find the ratio of the dark region's perimeter to the light region's perimeter. Then find the ratio of the dark region's area to the light region's area. Which ratio is greater?

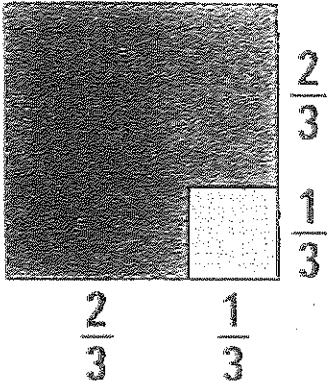
1)



2)



3)



4)

