


# CIRCLE THE NAME THAT BEST DESCRIBES THE SHAPE!

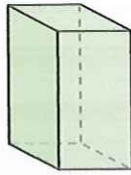
#71

1)



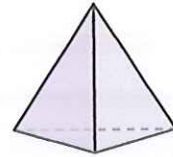
- A. Triangular Pyramid
- B. Cone
- C. Rectangular Prism
- D. Cylinder

2)



- A. Cone
- B. Rectangular Prism
- C. Triangular Pyramid
- D. Rectangular Pyramid

3)




- A. Triangular Prism
- B. Cone
- C. Triangular Pyramid
- D. Sphere

4)



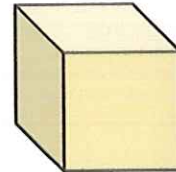
- A. Cylinder
- B. Triangular Prism
- C. Triangular Pyramid
- D. Rectangular Pyramid

5)



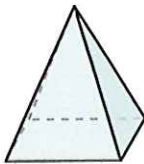
- A. Cone
- B. Rectangular Pyramid
- C. Sphere
- D. Cylinder

6)




- A. Cube
- B. Rectangular Prism
- C. Triangular Prism
- D. Cylinder

7)



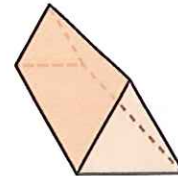
- A. Cone
- B. Rectangular Pyramid
- C. Sphere
- D. Rectangular Prism

8)



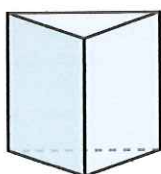
- A. Cone
- B. Rectangular Pyramid
- C. Triangular Pyramid
- D. Cube

9)



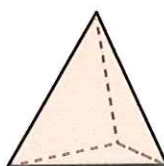
- A. Triangular Pyramid
- B. Sphere
- C. Triangular Prism
- D. Rectangular Pyramid

10)



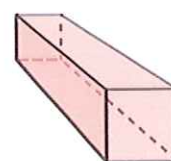
- A. Triangular Prism
- B. Sphere
- C. Cube
- D. Cone

11)



- A. Triangular Pyramid
- B. Triangular Prism
- C. Cylinder
- D. Cone

12)



- A. Triangular Prism
- B. Triangular Pyramid
- C. Rectangular Prism
- D. Cone