

EXTRA PRACTICE

#1

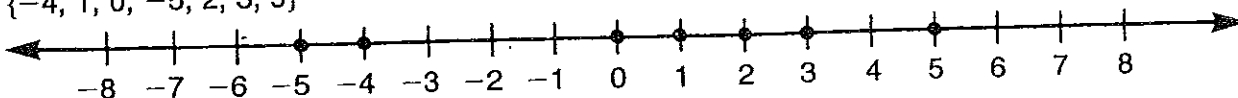
Graphing Integers

Name _____

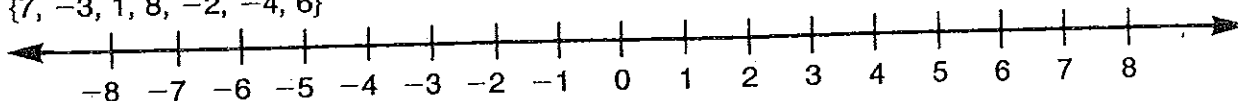
Date _____ Period _____

Graph each set of integers on the number line provided.

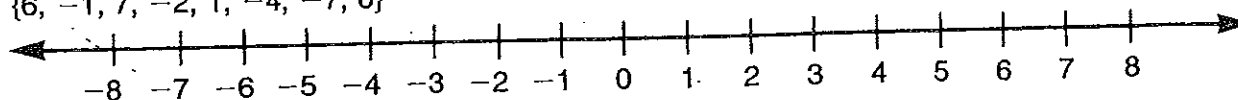
1. $\{-4, 1, 0, -5, 2, 3, 5\}$



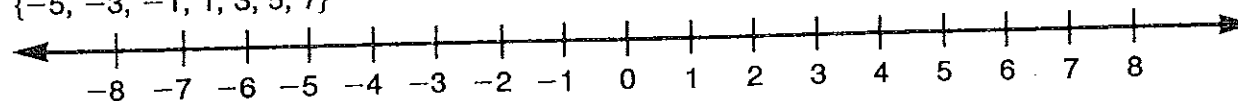
2. $\{7, -3, 1, 8, -2, -4, 6\}$



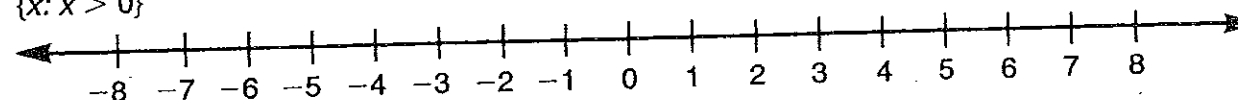
3. $\{6, -1, 7, -2, 1, -4, -7, 0\}$



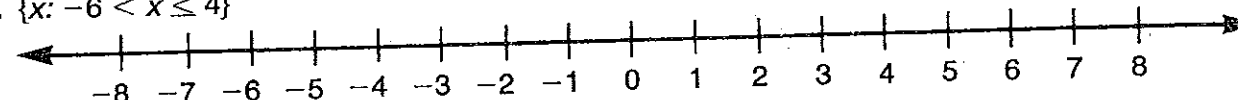
4. $\{-5, -3, -1, 1, 3, 5, 7\}$



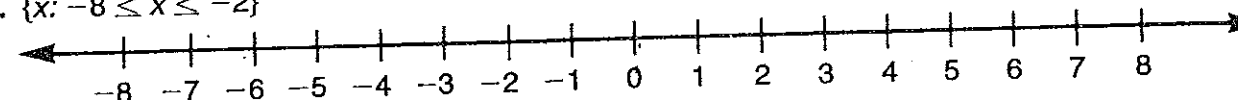
5. $\{x: x > 0\}$



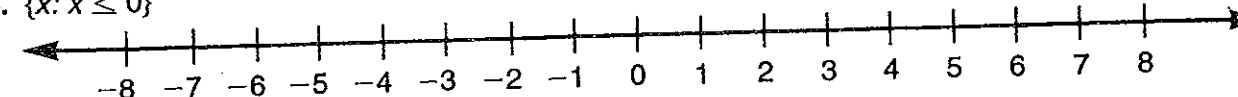
6. $\{x: -6 < x \leq 4\}$



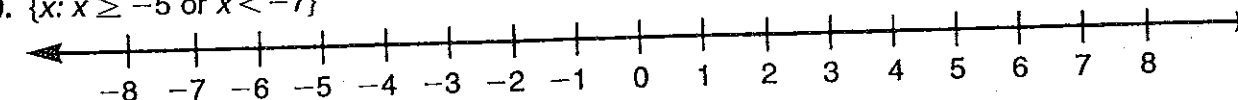
7. $\{x: -8 \leq x \leq -2\}$



8. $\{x: x \leq 0\}$



9. $\{x: x \geq -5 \text{ or } x < -7\}$



10. $\{x: x > 1 \text{ or } x \leq -1\}$

