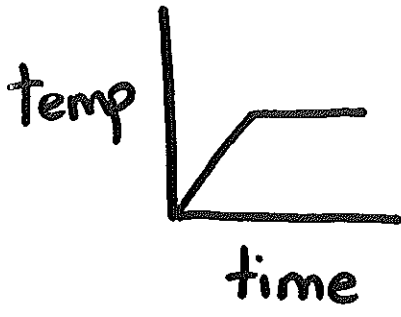


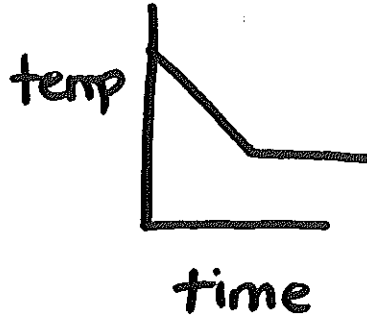
Name \_\_\_\_\_

# EXTRA PRACTICE

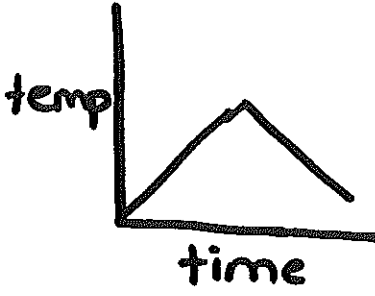
① The temperature of an ice cube increases until it starts to melt. While it melts, its temperature stays constant. Which graph shows the situation?



A



B



C

② Mike and Claudia rode a bus 15 miles to a wildlife park. They waited in line to ride a train, which took them on a 3 mile ride around the park. After the train ride, they ate lunch & then rode the bus home. Sketch a graph to show the distance Mike & Claudia traveled compared to time. Use your graph to find the total distance traveled.