

Name _____
Date _____
Period _____

TRIANGLES, TRIANGLES, TRIANGLES

Classify these triangles by their sides and by their angles.

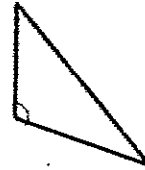
1)



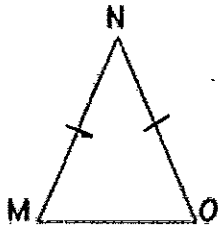
2)



3)



4)



5)

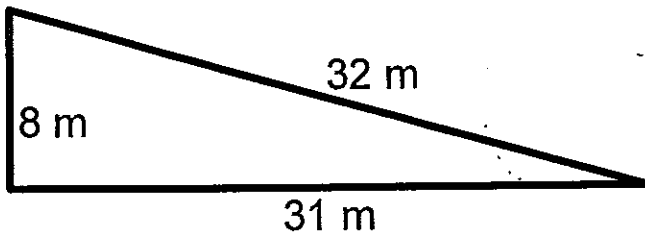


6)

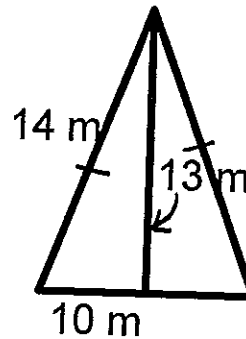


Find the perimeter and area of the following triangles:

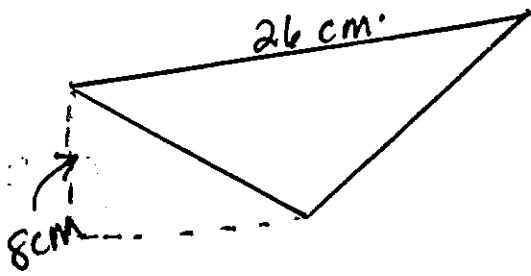
7)



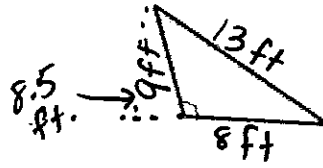
8)



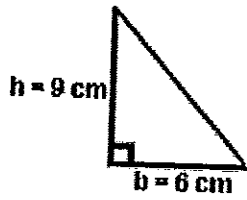
8)



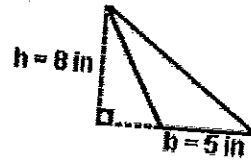
10)



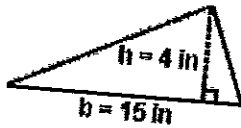
11)



12)



13)



14)

