

NAME \_\_\_\_\_

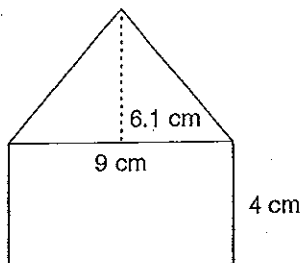
DATE \_\_\_\_\_

PERIOD \_\_\_\_\_

Pre-Algebra  
Area

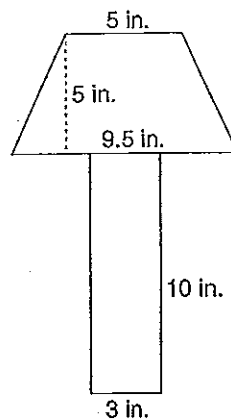
Find the total area of the figures below:

A.



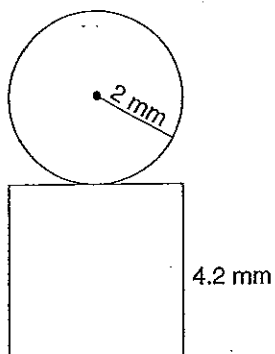
A = \_\_\_\_\_

B.



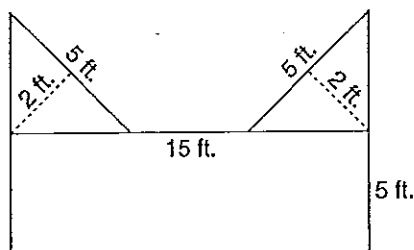
A = \_\_\_\_\_

C.



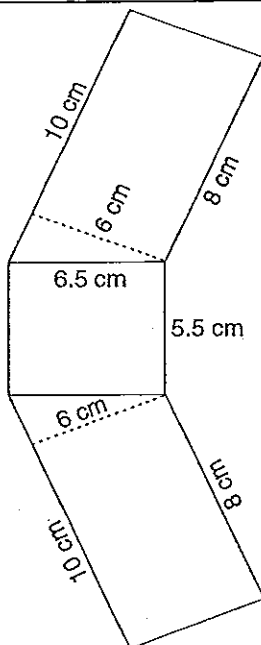
A = \_\_\_\_\_

D.



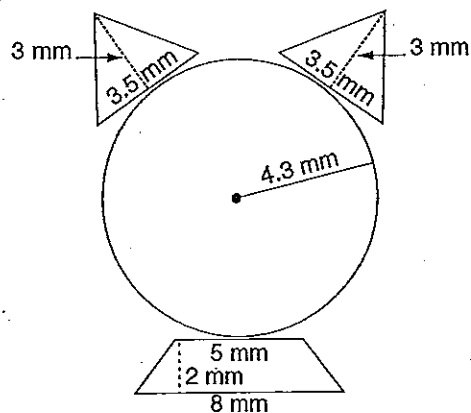
A = \_\_\_\_\_

E.



A = \_\_\_\_\_

F.



A = \_\_\_\_\_