

Name: _____



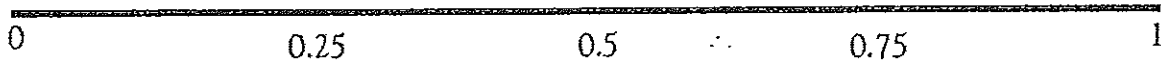
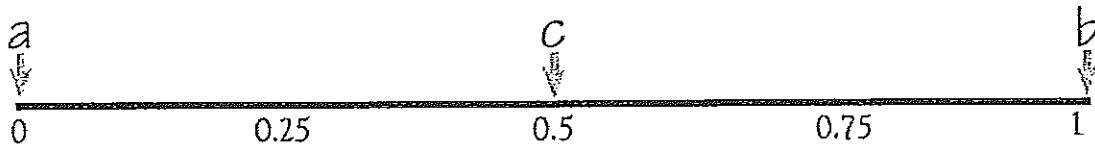
Probability scale 0 to 1

Look at this probability line.

- Impossible = 0
- Poor chance = 0.25
- Fair = 0.5
- Good chance = 0.75
- Certain = 1

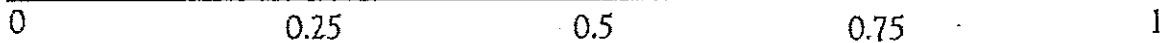

Write each letter in the correct place on the probability line.

- a. It will be daylight in New Orleans at midnight.
- b. The sun will come up tomorrow.
- c. If I toss a coin it will come down heads.




Write each letter in the correct place on the probability line.

- a. If I cut a pack of cards I will get a red card.
- b. If I cut a pack of cards I will get a diamond.
- c. If I cut a pack of cards I will get a diamond, a spade, or a club.
- d. If I cut a pack of cards I will get a diamond, a spade, a club, or a heart.
- e. If I cut a pack of cards it will be a 15.



Write each letter in the correct place on the probability line.

- a. Next week, Wednesday will be the day after Tuesday.
- b. There will be 33 days in February next year.
- c. It will snow in Miami in May.
- d. It will snow in Chicago in January.
- e. The next person to knock on the door will be a woman.



W
A
L
K
I
N
G

THE

L
I
N
E