

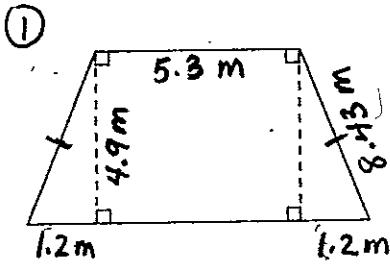
Name _____

Date _____

Period _____

More and More Quadrilaterals!!

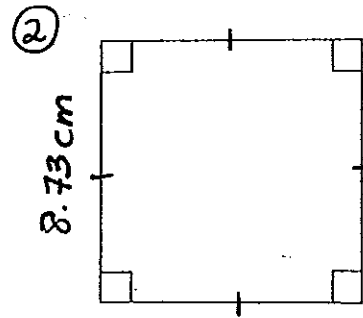
Tell what type of quadrilateral each polygon below is. Then find the perimeter and area of each one. Be sure to give the most specific name for each quadrilateral.



Type: _____

Perimeter: _____

Area: _____

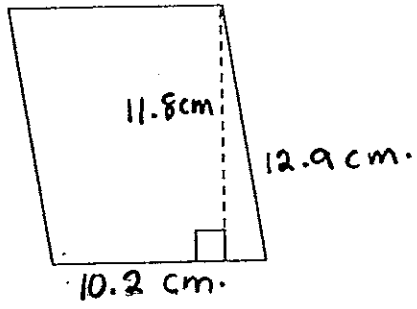


Type: _____

Perimeter: _____

Area: _____

③

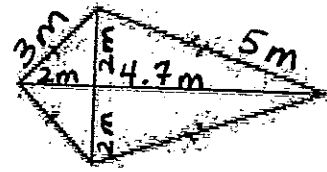


Type: _____

Perimeter: _____

Area: _____

④



Type: _____

Perimeter: _____

Area: _____