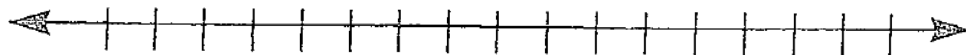


Name \_\_\_\_\_ Period \_\_\_\_\_ Date \_\_\_\_\_

In Class Assignment: Graphing Inequalities

For the following equations, graph the inequality

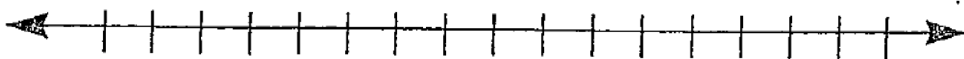
1.  $x \geq 5$



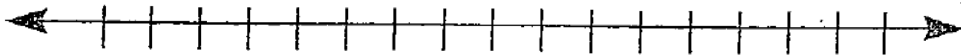
2.  $x > 4$



3.  $x < -3$



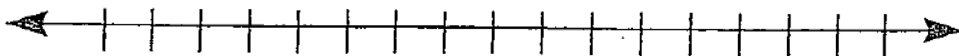
4.  $x > -4$



5.  $x \leq 3$



6.  $5 \geq x$



7.  $-3 > x$

