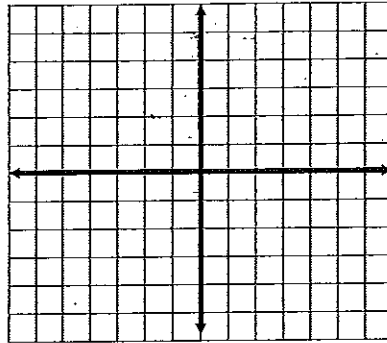


Name \_\_\_\_\_

1) By using a table, graph each of the following on the graph paper provided.

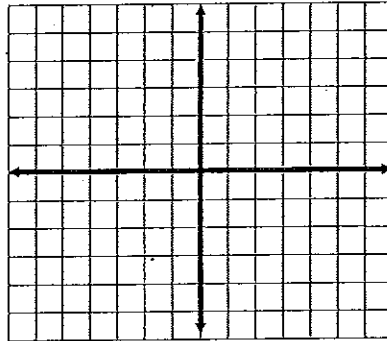
1.  $y = 2x - 3$

x		y



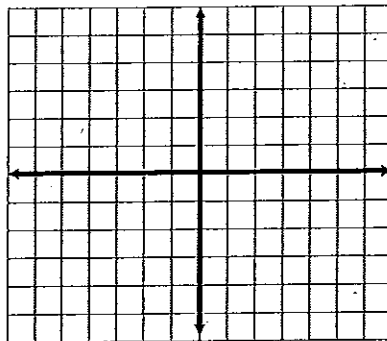
2.  $y = -3x + 2$

x		y



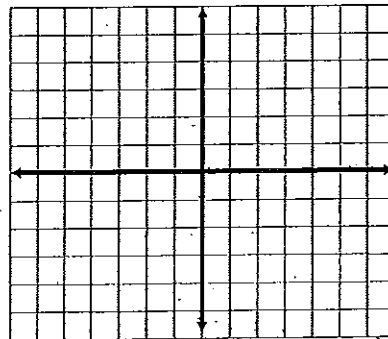
3)  $y = -5x$

x		y



4)  $y = 6x - 2$

x		y




Name \_\_\_\_\_

1) By using a table, graph each of the following on the graph paper provided.


5)  $y = -3x - 12$

x		y




6)  $y = \frac{3}{4}x - 5$

x		y



7)  $y = -\frac{2}{3}x$

x		y



8)  $y = -2.5x$

x		y

