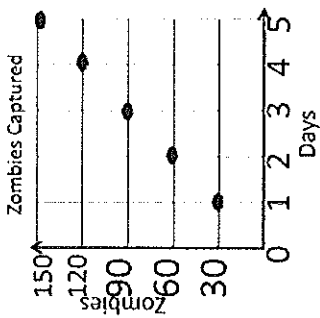
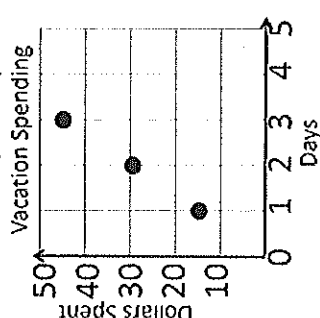
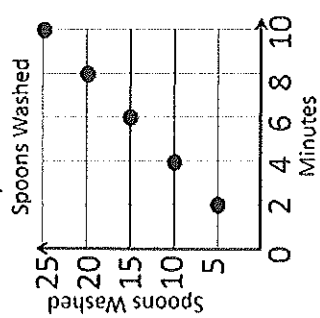
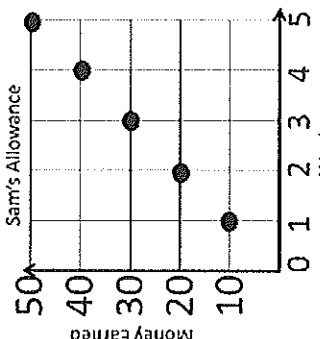
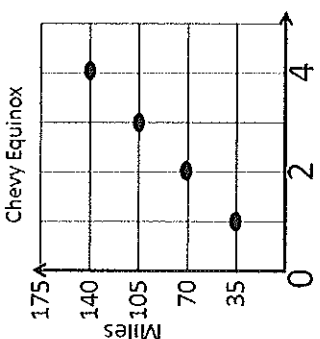
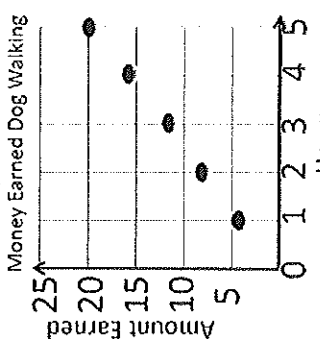



# PROPORTIONAL RELATIONSHIPS AND UNIT RATE



Name \_\_\_\_\_  
 Directions: Circle the answer to each question. Color the picture with the color assigned to the number of your answer choice.

<p>1. Which answer best describes the rate of zombies captured?</p> 	<p>2. Which is the best description of the rate money was spent?</p> 	<p>3. Which answer best describes the rate the spoons are washed?</p> 
<p>60 zombies per day red</p> <p>30 zombies per day orange</p> <p>4 zombies per day blue</p>	<p>\$15 per day blue</p> <p>\$20 per day red</p> <p>\$30 per day yellow</p>	<p>5 spoons a minute green</p> <p>5 spoons in 2 minutes yellow</p> <p>5 spoons red</p>
<p>4. Which is the best description of the rate Sam gets allowance?</p> 	<p>5. Which answer best describes the miles per gallon?</p> 	<p>6. Which answer best describes the rate money is earned?</p> 
<p>\$10 per week purple</p> <p>\$20 per week red</p> <p>\$30 per 2 weeks green</p>	<p>35 gallons per mile blue</p> <p>175 miles per gallon red</p> <p>35 miles per gallon green</p>	<p>\$5 per hour orange</p> <p>\$8 per hour yellow</p> <p>\$4 per hour red</p>

# PROPORTIONAL RELATIONSHIPS AND UNIT RATE



Name \_\_\_\_\_

Directions: Circle the answer to each question. Color the picture with the color assigned to the number of your answer choice.

<p>1. What is the rate for pancakes made per hour?</p>	<p>2. What is the rate of profits per 8 hours?</p>	<p>3. What is hourly profit rate?</p>
<p>120 per hour pink</p> <p>10 per hour blue</p> <p>50 per hour green</p>	<p>750 per 8 hours green</p> <p>1200 per 8 hours dark blue</p> <p>150 per 8 hours red</p>	<p>75 donuts per hour orange</p> <p>\$75 per hour orange</p> <p>\$150 per hour pink</p>
<p>4. What is the rate of pancakes made per hour?</p>	<p>5. What is the rate of shots made for an 80 game season?</p>	<p>6. What is the rate of shots per game?</p>
<p>10 pancakes per hour red</p> <p>120 pancakes per hour blue</p> <p>240 pancakes per hour yellow</p>	<p>640 shots made in 80 games green</p> <p>500 shots made in 80 games pink</p> <p>700 shots made in 80 games red</p>	<p>10 shots made per game purple</p> <p>200 shots made per game pink</p> <p>15 shots made per game red</p>