

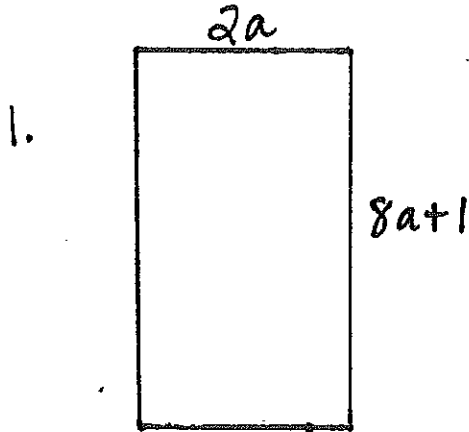
Name: _____

Date: _____

#56

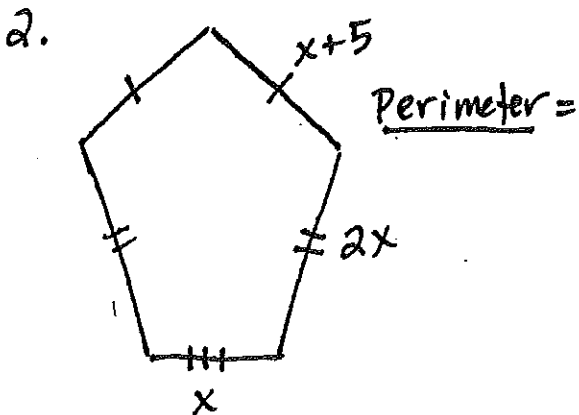
Area and Perimeter Problems

Directions: Write a simplified expressions for the perimeter OR area of each figure. Then tell what the perimeter or area would be if $x = 3, 4, 5,$ and 6 .

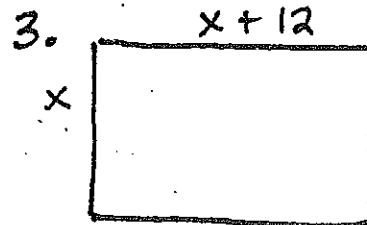


Perimeter =

Area =



Perimeter =



Area =