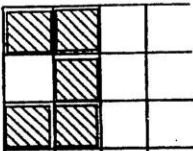




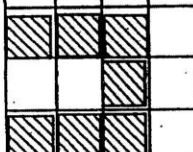
Diagram	Table
---------	-------

Below are some growing bridges! The first three stages are shown in this diagram.

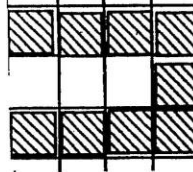
Stage 1



Stage 2




Stage 3



Make a table showing the stages and how many links are in each stage.

STAGE #	# of links

Graph	Extension
-------	-----------



- 1) How many links would be in stage 4?
- 2) How many links would be in stage 7?
- 3) Can you write a rule for how these bridges are growing?

Make a line graph using the data from either the growing bridges picture or the table you constructed.