

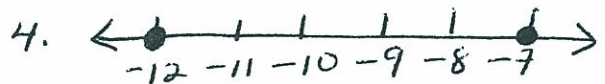
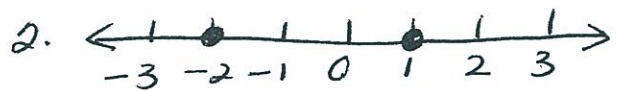

NAME _____

DATE _____

PERIOD _____

PRE - ALGEBRA
CHAPTER 3
INVESTIGATING INTEGERS

For each pair of numbers below, which number is greater? How can you tell?



Write a "number-line rule" for deciding which of two numbers is greater.

Write a number for each description:

1. A hot-air balloon rose 10 feet in the air.
2. The temperature fell 4 degrees.
3. You sold a cake for a profit of 4 dollars.
4. A football team lost 10 yards on a play.